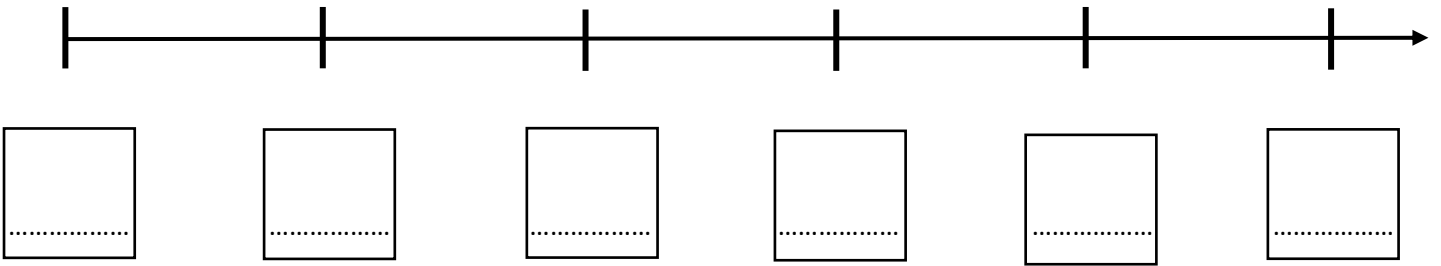



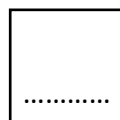
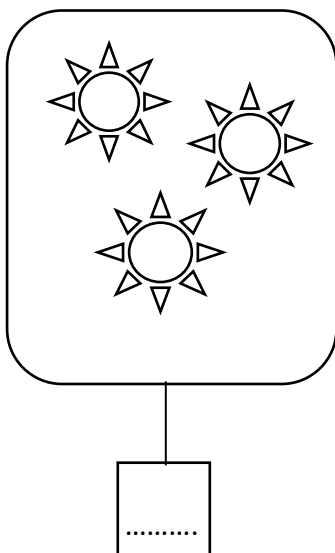

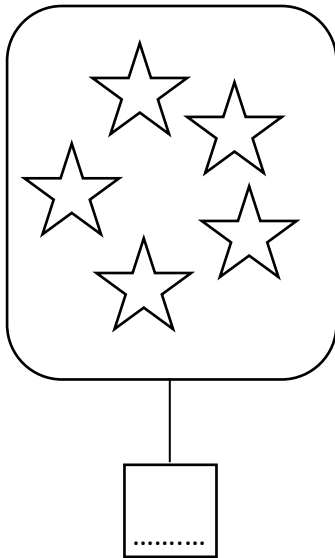
NOME: _____ CLASSE: _____ DATA: _____

VERIFICA

1. COMPLETA LA LINEA DEI NUMERI CON I NUMERI DALLO 0 AL 5



2. CONTA GLI ELEMENTI, INDICA IL NUMERO E INSERISCI IL SIMBOLO $>$ O $<$



3. COLORA I QUADRATINI IN **ORDINE CRESCENTE** E SCRIVI SOTTO IL NUMERO CORRISPONDENTE (INCLUSO LO 0)

| | | | | | |
|--|--|--|--|--|--|
| | | | | | |
| | | | | | |
| | | | | | |
| | | | | | |
| | | | | | |

.....

4. COLORA I QUADRATINI IN **ORDINE DECRESCENTE** E SCRIVI SOTTO IL NUMERO CORRISPONDENTE (INCLUSO LO 0)

| | | | | | |
|--|--|--|--|--|--|
| | | | | | |
| | | | | | |
| | | | | | |
| | | | | | |
| | | | | | |

.....

5. SCRIVI IL **NUMERO PRECEDENTE** E IL **NUMERO SUCCESSIVO**

| | |
|--|---|
| | 1 |
| | 2 |
| | 3 |
| | 4 |
| | 5 |

| | |
|---|--|
| 0 | |
| 1 | |
| 2 | |
| 3 | |
| 4 | |