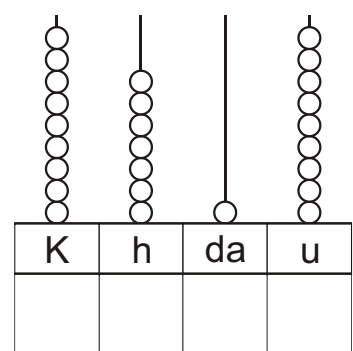
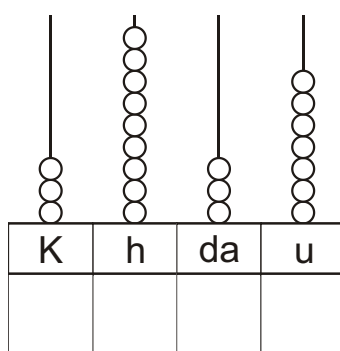
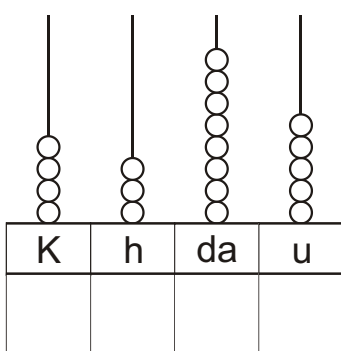
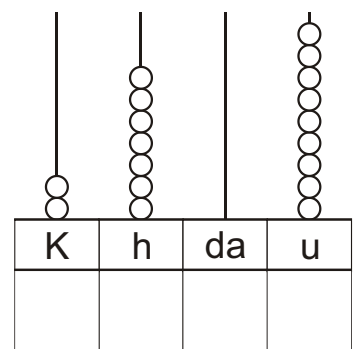
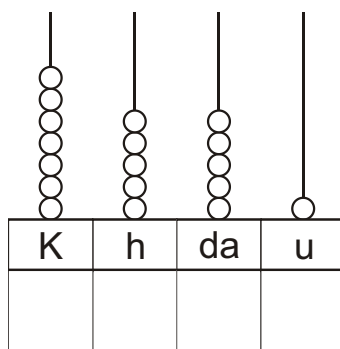
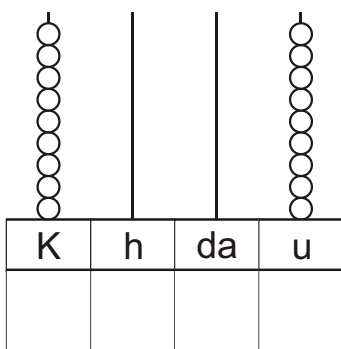
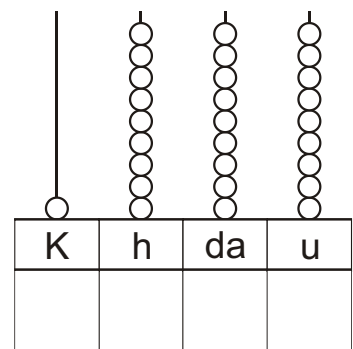
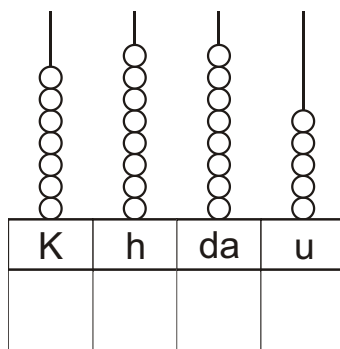
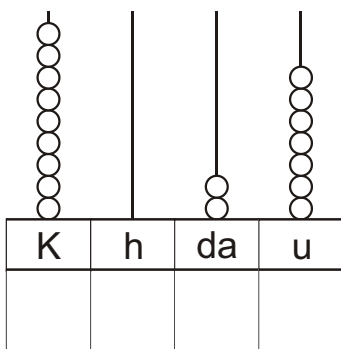
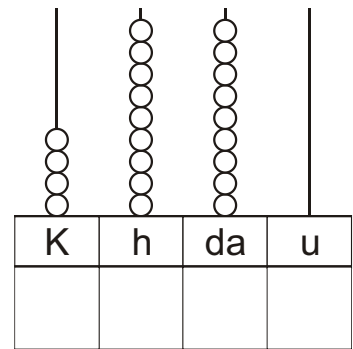
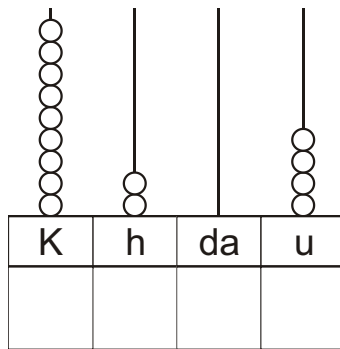
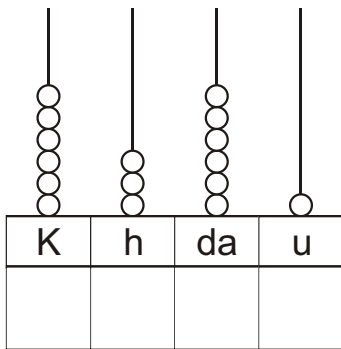


IL VALORE DELLE CIFRE

Completa scrivendo i numeri in cifra registrati con l'abaco:



IL VALORE DELLE CIFRE

Rappresenta con le palline sull'abaco i numeri scritti in cifra:

K	h	da	u
5	6	9	0

K	h	da	u
2	7	1	5

K	h	da	u
3	0	0	3

K	h	da	u
9	8	0	0

K	h	da	u
1	5	2	2

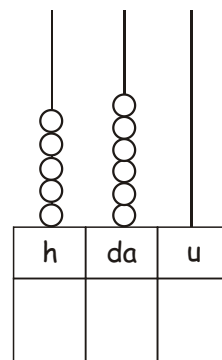
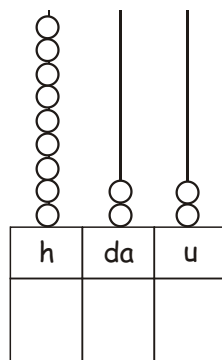
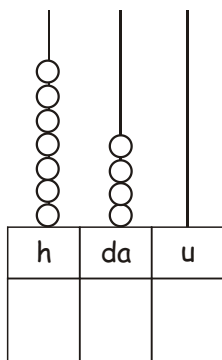
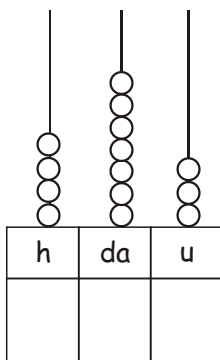
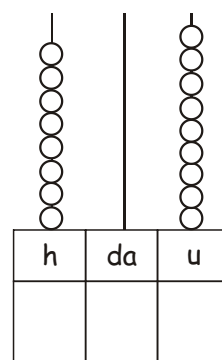
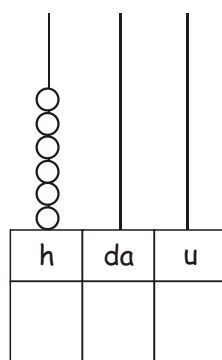
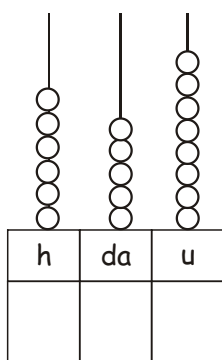
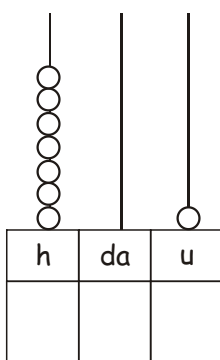
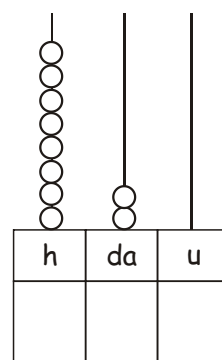
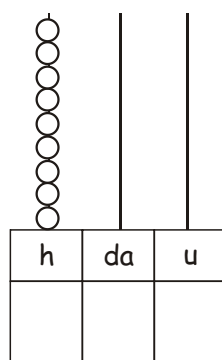
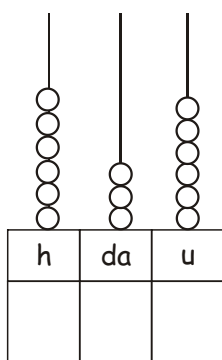
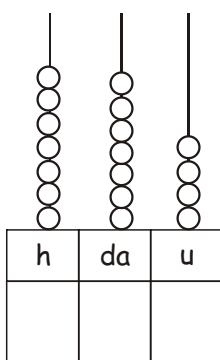
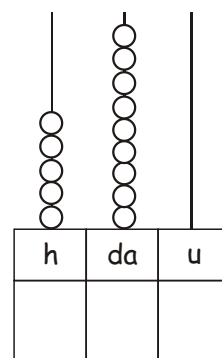
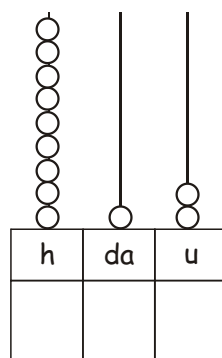
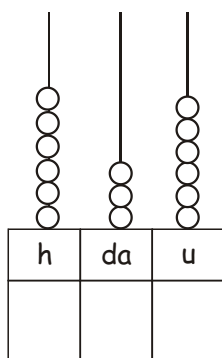
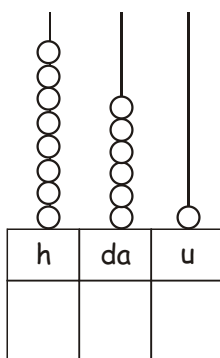
K	h	da	u
7	0	1	1

K	h	da	u
8	1	5	0

K	h	da	u
4	2	3	5

K	h	da	u
6	5	0	2

Completa scrivendo i numeri in cifra registrati con l'abaco:



Rappresenta sull'abaco con le palline i numeri scritti in cifra:

h	da	u
5	2	3

h	da	u
8	4	5

h	da	u
9	0	6

h	da	u
7	8	7

h	da	u
8	0	2

h	da	u
6	0	0

h	da	u
5	3	9

h	da	u
9	9	9

h	da	u
7	1	5

h	da	u
8	3	7

h	da	u
9	2	0

h	da	u
6	0	7

h	da	u
5	0	8

h	da	u
7	4	6

h	da	u
8	2	9

h	da	u
9	3	0

K h da u d c m

K h da u d c m

K h da u d c m

