

**Completa la tabella inserendo il numero precedente e successivo**

| PRECEDENTE | NUMERO | SUCCESSIVO |
|------------|--------|------------|
|            | 23     |            |
|            | 13     |            |
|            | 98     |            |
|            | 54     |            |
|            | 10     |            |
|            | 73     |            |
|            | 64     |            |
|            | 1      |            |
|            | 44     |            |

**Metti il segno tra i due numeri : < minore, > maggiore, = uguale**

25.....52

17.....16

45.....78

10.....9

55.....15

72.....72

99.....66

15.....1

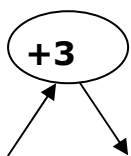
14.....13

39.....93

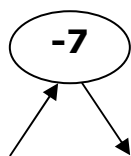
10.....1

0.....0

**Completa le tabelle**



|    |  |
|----|--|
| 10 |  |
| 46 |  |
| 32 |  |
| 89 |  |
| 74 |  |
| 51 |  |
| 33 |  |



|    |  |
|----|--|
| 32 |  |
| 27 |  |
| 71 |  |
| 40 |  |
| 34 |  |
| 62 |  |
| 7  |  |

15  $\xrightarrow{+5}$    $\xrightarrow{-7}$  13

22  $\xrightarrow{+1}$    $\xrightarrow{-9}$

19  $\xrightarrow{+3}$    $\xrightarrow{-10}$

50  $\xrightarrow{+10}$    $\xrightarrow{-30}$

**Completa la tabella inserendo il numero precedente e successivo**

| PRECEDENTE | NUMERO | SUCCESSIVO |
|------------|--------|------------|
|            | 100    |            |
|            | 153    |            |
|            | 298    |            |
|            | 350    |            |
|            | 99     |            |
|            | 343    |            |
|            | 204    |            |
|            | 101    |            |
|            | 2      |            |

**Metti il segno tra i due numeri : < minore, > maggiore, = uguale**

- 104.....124      136.....106      145.....154      100.....101  
 235.....135      112.....112      329.....293      105.....205  
 144.....103      209.....219      140.....104      100.....100

**Completa le tabelle**

**+8**

|    |  |
|----|--|
| 22 |  |
| 82 |  |
| 44 |  |
| 88 |  |
| 90 |  |
| 73 |  |
| 65 |  |

**- 9**

|    |  |
|----|--|
| 59 |  |
| 76 |  |
| 84 |  |
| 99 |  |
| 61 |  |
| 43 |  |
| 91 |  |

|           |                    |  |                    |           |
|-----------|--------------------|--|--------------------|-----------|
| <b>36</b> | $\xrightarrow{+4}$ |  | $\xrightarrow{-9}$ | <b>31</b> |
| <b>41</b> | $\xrightarrow{+5}$ |  | $\xrightarrow{-6}$ |           |
| <b>50</b> | $\xrightarrow{+7}$ |  | $\xrightarrow{-2}$ |           |
| <b>66</b> | $\xrightarrow{+9}$ |  | $\xrightarrow{-4}$ |           |

**Completa la tabella inserendo il numero precedente e successivo**

| PRECEDENTE | NUMERO | SUCCESSIVO |
|------------|--------|------------|
|            | 765    |            |
|            | 432    |            |
|            | 505    |            |
|            | 600    |            |
|            | 199    |            |
|            | 123    |            |
|            | 543    |            |
|            | 222    |            |
|            | 313    |            |

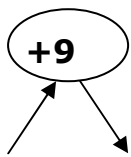
**Metti il segno tra i due numeri : < minore, > maggiore, = uguale**

501.....105      331.....131      445.....554      101.....101

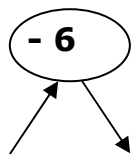
215.....512      876.....678      321.....321      175.....705

200.....101      319.....193      696.....969      369.....639

**Completa le tabelle**



|     |  |
|-----|--|
| 147 |  |
| 152 |  |
| 121 |  |
| 147 |  |
| 215 |  |
| 306 |  |
| 203 |  |



|     |  |
|-----|--|
| 155 |  |
| 164 |  |
| 101 |  |
| 129 |  |
| 108 |  |
| 202 |  |
| 187 |  |

114  $\xrightarrow{+4}$    $\xrightarrow{-1}$  117

100  $\xrightarrow{+6}$    $\xrightarrow{-9}$

212  $\xrightarrow{+3}$    $\xrightarrow{-2}$

153  $\xrightarrow{+9}$    $\xrightarrow{-7}$